

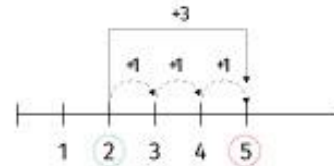
ZADATAK: IZRAČUNAJ ZADATKE ZBRAJANJA DO 20 UZ POMOĆ BROJEVNE CRTE.



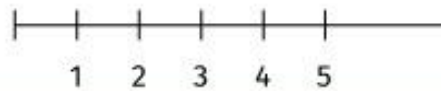
ZBRAJANJE

Izračunaj koristeći brojevnu crtu.

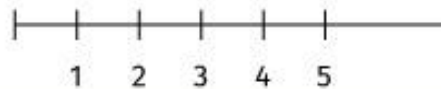
$$2 + 3 = 5$$



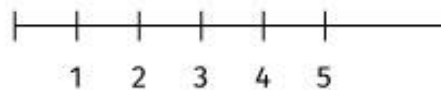
$$3 + 2 = \square$$



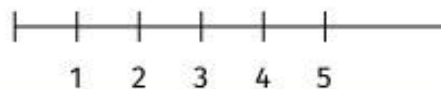
$$2 + 1 = \square$$



$$1 + 4 = \square$$



$$1 + 3 = \square$$



$$2 + 2 = \square$$

