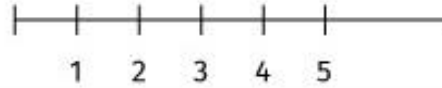


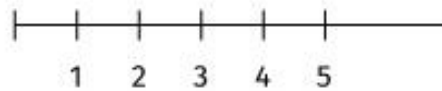
MATEMATIKA – SRIJEDA: 20.10.2021.

ZADATAK: IZRAČUNAJ ZADATKE ZBRAJANJA I ODUZIMANJA DO 20 UZ POMOĆ BROJEVNE CRTE.

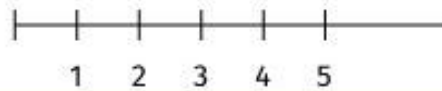
$2 + 1 = \square$



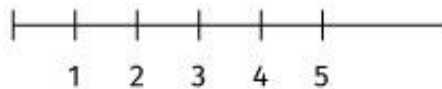
$1 + 4 = \square$



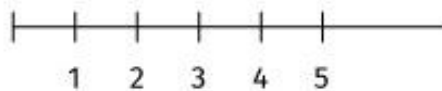
$1 + 3 = \square$



$4 - 1 = \square$



$3 - 1 = \square$



$2 - 1 = \square$

